

# 2

## European music




1. What type of music does this group play?



- ☐ Romani music
- ☒ Celtic music
- ☐ Tyrolean singing

*¿c?*  
*Hoja*  
*kaia*

2. Put the letters in order to find the name of this instrument.



K A N T E L E

3. Complete the text with these words:

music countries traditional Europe

In Europe many countries and cultures live close together. Some of our países music and traditional dances are similar, but others are very different.

4. Which styles of music are from Central Europe? Tick.

- ☐ Celtic music
- ☒ Jazz manouche
- ☐ Romani music
- ☒ The polka
- ☒ Tyrolean singing
- ☐ The jota

*Europe*  
*Central*

5. Look at the picture below and answer the questions.



- What is this instrument called?  
Alpenhorn
- Where is it typical?  
Central Europe
- What material is used to make it?  
Wood

6. Match the types of music to their corresponding pictures.



Tyrolean singing

Romani music

Jazz manouche



7. Match each sound to its level of volume.




*p*                      *mf*                      *f*



8. Complete this exercise with groups of semiquavers.



9. Use your book to help you complete this chart.



• How many semiquavers fit in one beat?

Four

10. Draw these notes in the stave.



11. Look at the train carriages. Which time signature do they form? Tick the answer below.



todos tienen mismos tiempos

## 12. Unorganised groups:

Circle each group with the corresponding colours.

European music  
Non-European music

Central Europe  
Atlantic Europe  
Eastern Europe



## 13. Secret codes.

Find and circle the names of these levels of volume and musical symbols.



*easy prey*

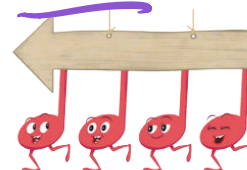
F	T	T	O	N	A	R	U	S	S
M	E	Z	Z	O	F	O	R	T	E
E	S	S	M	I	O	O	E	S	M
V	O	O	C	S	R	U	M	I	I
A	S	S	E	V	T	T	I	M	Q
K	Q	U	A	V	E	R	S	E	U
I	E	E	N	I	S	S	O	T	A
S	N	P	O	A	I	P	N	O	V
S	I	I	M	I	N	I	M	A	E
I	D	A	G	C	L	A	V	E	R
I	D	N	G	C	L	A	V	E	S
N	O	O	U	E	T	O	P	I	T

## 14. Musical! Guess who?

Two of us fit in the space of a quaver, but we like to travel in fours. We are very quick and very thin, so don't miss us. Pay attention!

- What are we? *Semiquavers*

*Adeline*



*delgado*

1. What does this sign mean? Tick your answer below.

- ☒ Moderately loud  
☐ Very loud  
☐ Music first

*pudro*  
*meto forte*  
*mf*

2. Tick the sentence that describes this musician.



- ☐ He is playing a jota.  
☐ He is yodelling.  
☒ He is playing jazz manouche.

3. What do volume levels indicate? Tick.

- ☒ The intensity of the music.  
☐ The speed of the music.  
☐ The instrument to be played.

*volumen = intensidad*  
*recorder*  
*piano, pp, f...*

4. What other name can describe Romani music?



- ☐ Jazz manouche  
☒ Gypsy music  
☐ Tyrolean singing

5. Complete this sentence.

- In the regions near the Atlantic ocean, we can find Celtic music, among other types.
- The kantele is a pluck string instrument that is typical of Finland in northern Europe.

*hoja kanta*

6. Musical addition. When you add these musical symbols and rests together, what are their sums? Write your answers.

$$\begin{array}{rcl}
 \text{Quarter note} & + & \text{Quarter note} + \text{Quarter note} + \text{Quarter note} \\
 & & = 5 \\
 \text{Quarter note} + \text{Quarter note} + \text{Quarter note} & + & \text{Half note} + \text{Quarter note} \\
 & & = 6 \\
 \text{Quarter note} & + & \text{Half note} + \text{Quarter note} + \text{Quarter note} \\
 & & = 3 \frac{1}{2} \\
 \text{Half note} & + & \text{Quarter note} + \text{Quarter note} \\
 & & = 7
 \end{array}$$



• Are four or more of your answers correct? Congratulations!



• If you don't have four or more answers correct, go over the unit and try again. You can do it!