



Name: _____ Date: _____ Class: _____

1) Match each instrument with its name.

? Vair



clarinet

saxophone

flute

2) What kind of mouthpiece do these woodwind instruments use? Write each name in the box below the corresponding picture.

¿qué tipo?

bassoon saxophone flute oboe clarinet



Saxophone



Flute



3) Find the mistake in each sentence. Then write them correctly.

Escribimos correctamente

In brass wind instruments, sound is produced by blowing through holes or reeds.

?
yes or not?


The oboe and flute are double reed instruments. yes or not?

4) Draw the bar lines of this exercise. líneas diuisionias cada 2 Beats



5) In the previous exercise, what crotchets can be joined to make them minims? Draw the ties between them.

Ejercisio de amiba

Recordamos tie → ligadura  une 2 o más notas.
Sumando sus valores


$$\text{♩} \text{---} \text{♩} = 1 + 1 = 2 = \text{♩}$$

$$\text{♩} \text{---} \text{♩} = 2 + 2 = 4 = \text{♩}$$


$$\text{♪} \text{---} \text{♪} = 0.5 + 0.5 = 1 = \text{♩}$$

2 normas o reglas para usar Tie

1ª → se pone siempre en la cabeza



2ª → tienen que ser notas que se llamen igual. Podemos unir do + do
re + re
mi + mi



nunca fa + mi